



Alexander the Great Map

On the map, label the following seas and colour them in lightly, in blue:

- Mediterranean Sea
- Black Sea
- Caspian Sea
- Persian Gulf
- Arabian Sea
- Red Sea

Label the following places on the map:

- Ariana
 - Arabia
 - Egypt
 - Armenia
 - Bactria
 - Macedonia
-



Alexander the Great Map

On the map, label the following seas and colour them in lightly, in blue:

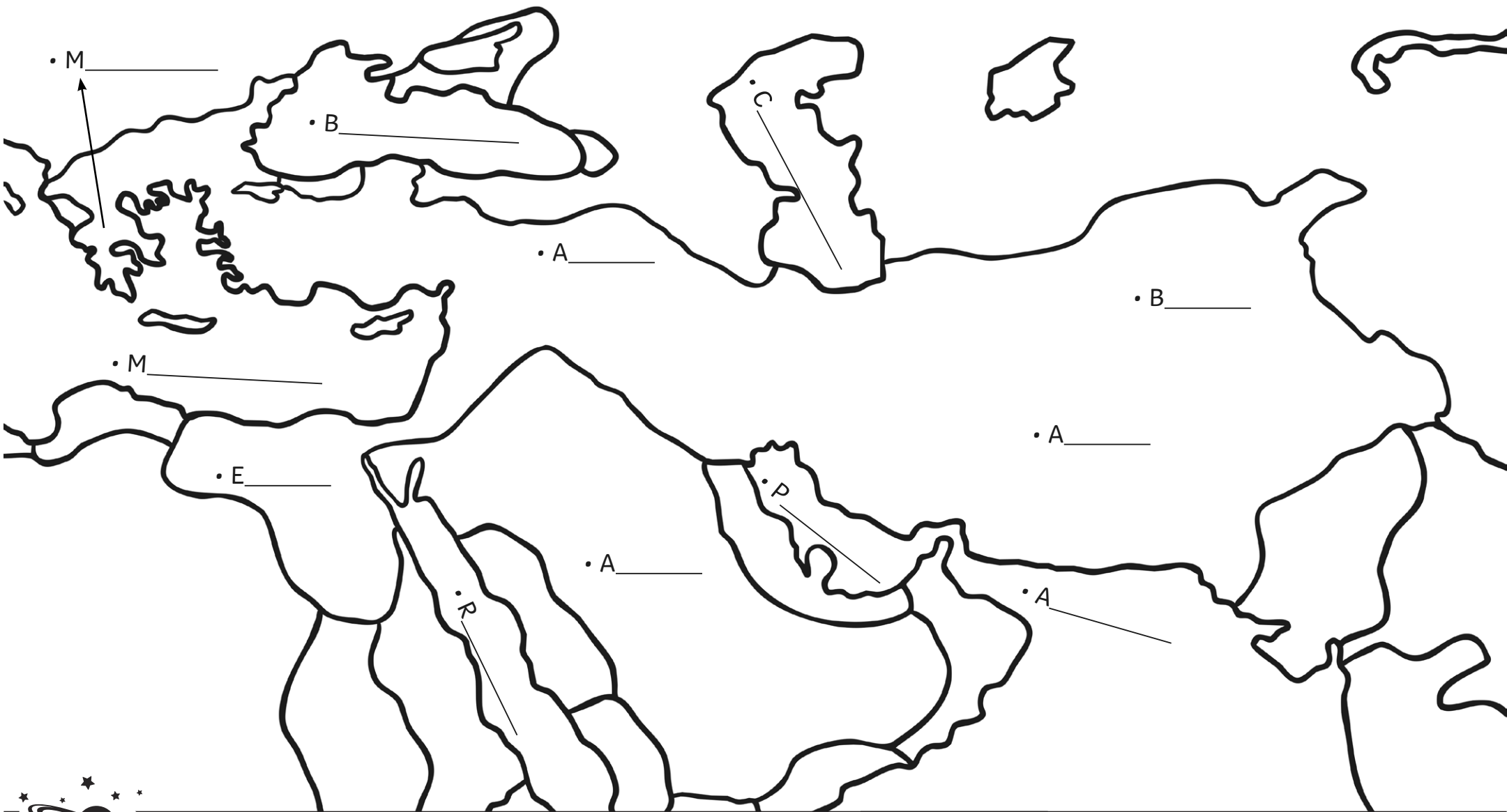
- Mediterranean Sea
- Black Sea
- Caspian Sea
- Persian Gulf
- Arabian Sea
- Red Sea

Label the following places on the map:

- Ariana
- Arabia
- Egypt
- Armenia
- Bactria
- Macedonia

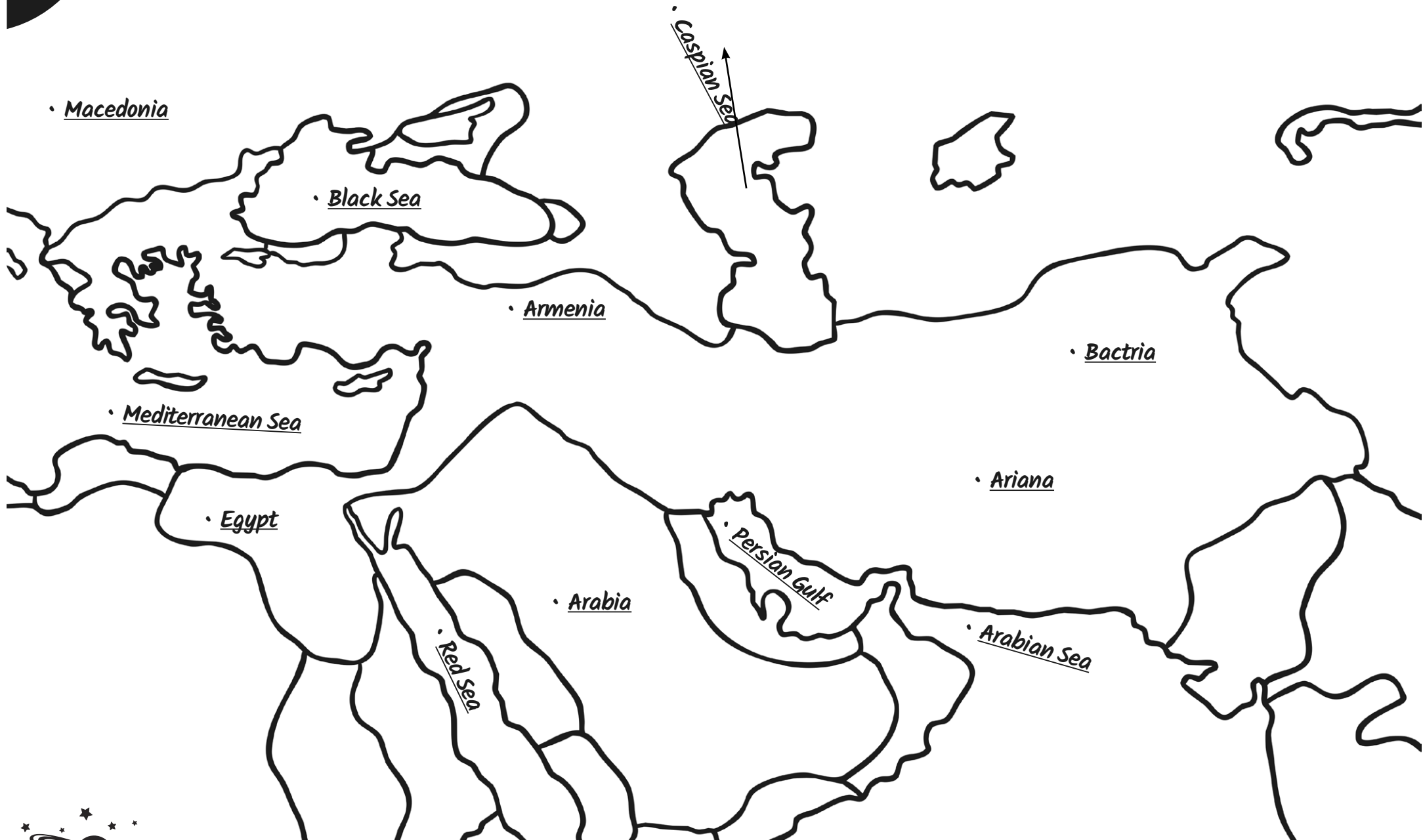


Alexander the Great Map





Alexander the Great Map Answers





Alexander the Great Map

On the map, label the following seas and colour them in lightly, in blue:

- Mediterranean Sea
- Black Sea
- Caspian Sea
- Persian Gulf
- Arabian Sea
- Red Sea

Label the following places on the map:

- Ariana
- Arabia
- Egypt
- Armenia
- Bactria
- Macedonia



Alexander the Great Map

On the map, label the following seas and colour them in lightly, in blue:

- Mediterranean Sea
- Black Sea
- Caspian Sea
- Persian Gulf
- Arabian Sea
- Red Sea

Label the following places on the map:

- Ariana
- Arabia
- Egypt
- Armenia
- Bactria
- Macedonia

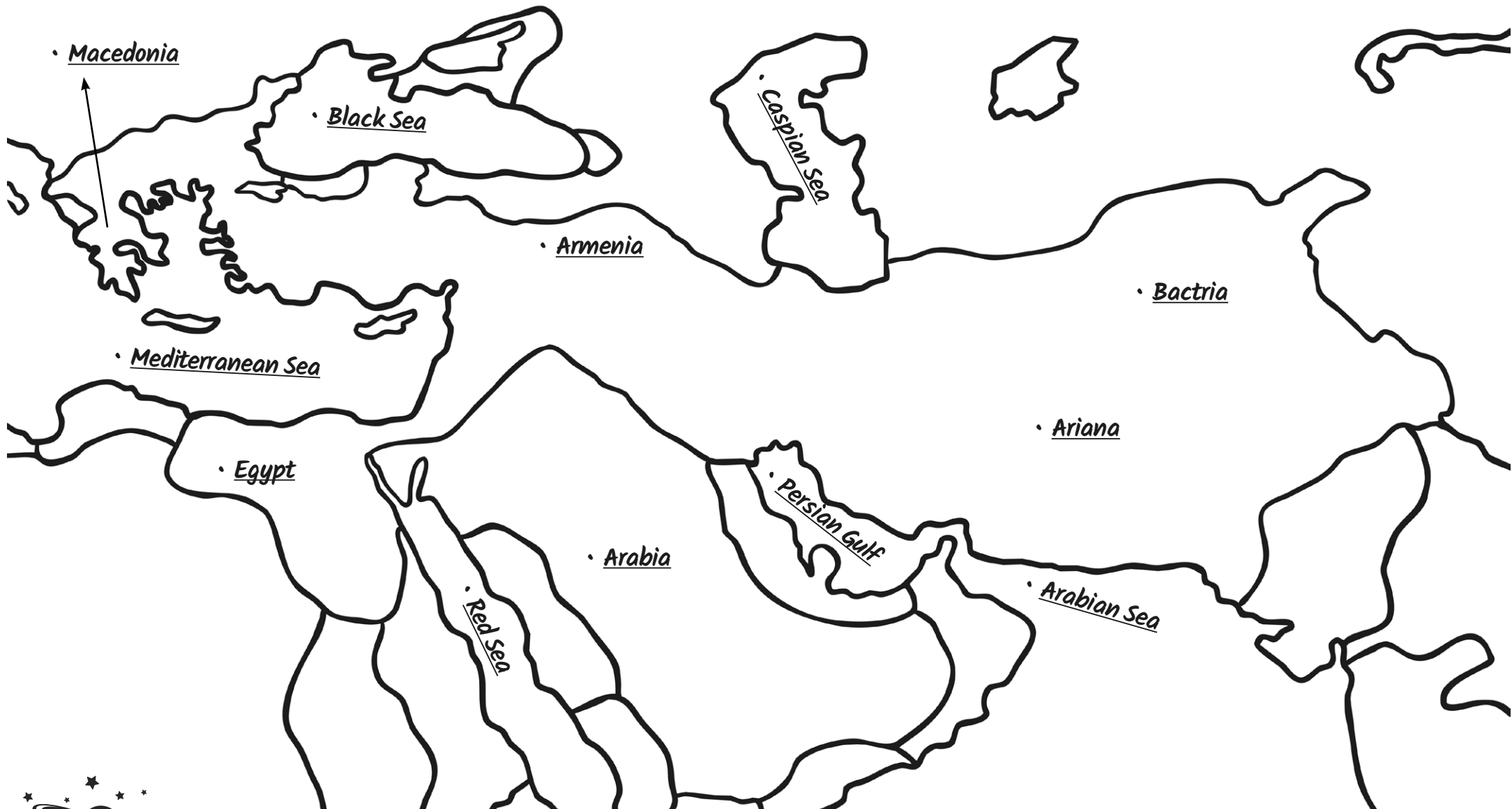


Alexander the Great Map





Alexander the Great Map Answers





Alexander the Great Map

On the map, label the following seas and colour them in lightly, in blue:

- Mediterranean Sea
- Black Sea
- Caspian Sea
- Persian Gulf
- Arabian Sea
- Red Sea

Label the following places on the map:

- Ariana
- Arabia
- Egypt
- Armenia
- Bactria
- Macedonia
- Alexandria in Aria
- Alexandria in Carmania
- Alexandria on the Indus



Alexander the Great Map

On the map, label the following seas and colour them in lightly, in blue:

- Mediterranean Sea
- Black Sea
- Caspian Sea
- Persian Gulf
- Arabian Sea
- Red Sea

Label the following places on the map:

- Ariana
- Arabia
- Egypt
- Armenia
- Bactria
- Macedonia
- Alexandria in Aria
- Alexandria in Carmania
- Alexandria on the Indus



Alexander the Great Map





Alexander the Great Map Answers

